

Name: _____

Period _____

Time Signatures 2- Adv

Directions: Identify the time signature and write the letter of the missing note in the box (use the answer box). You may use the letter more than once. You must show your work to receive credit! Use Pencil Only (1 point each)

- | | | |
|-------------------|-----------------|-------------------|
| a. Dotted Half | d. Eighth note | f. Sixteenth Note |
| b. Dotted Quarter | e. Quarter Note | g. Whole Note |
| c. Half Note | | |


1. 2. 3.

4. 5. 6.

7. 8. 9.

10. 11. 12.

13. 14. 15.




16.

- a. 2 b. 4 c. 6 d. 8




17.

- a. 2 b. 4 c. 6 d. 8




18.

- a. 2 b. 3 c. 4 d. 5



19.

- a. 3 b. 4 c. 6 d. 9



20.

- a. 2 b. 4 c. 6 d. 8