

Name: _____

Period: _____

Time Signatures WKST 1- Inter.

Directions: Identify the time signature and write the letter of the missing note in the box.
Use Pencil Only

1. 2. 3. 4.


- a. Dotted Half
- b. Whole Note
- c. Half Note
- d. Eighth note
- e. Quarter Note
- f. Sixteenth Note

5. 6. 7. 8.

- a. Dotted Half
- b. Dotted Quarter
- c. Half Note
- d. Eighth note
- e. Quarter Note
- f. Sixteenth Note

9. 10. 11 12.


- a. Dotted Half
- b. Dotted Quarter
- c. Half Note
- d. Eighth note
- e. Quarter Note
- f. Sixteenth Note



13.


14. 15.

- a. Dotted Half
- b. Dotted Quarter
- c. Half Note
- d. Eighth note
- e. Quarter Note
- f. Sixteenth Note



16.

- a. 2
- b. 4
- c. 3
- d. 6



17.

- a. 2
- b. 4
- c. 6
- d. 8



18.

- a. 2
- b. 4
- c. 6
- d. 8